



1


Jerry spent \$298 dollars at the grocery store for Thanksgiving dinner. Blair spent \$150 dollars and Rachel spent \$78. How much more did Jerry spend on Thanksgiving dinner than Blair and Rachel together?

**2**

Sara wanted to hang up 150 posters for the turkey eating contest. She hung 75 and her friend hung 49. How many more posters do they still need to hang?

**3**


Bobby's family had 4 people come over for Thanksgiving dinner. Each person brought 2 side dishes. Bobby's family also made 2 side dishes. How many side dishes were there in all?

**4**


Amelia and her mom made 10 pumpkin rolls for their annual Thanksgiving feast. Each roll had 6 slices in it. Her large family ate 43 slices of pumpkin roll. How many slices were left over?




5 Jane's dad sliced 25 pieces of turkey. Her brother ate 6 slices and her uncle ate 5 slices. How many slices were left over for everyone else?



6 On the farm, there were 10 turkeys. Each turkey had 8 feathers. The farmer added 2 more turkeys to the farm. How many feathers would you see on that farm?



7 Beth had 3 bags of pumpkin muffins. Each bag has 12 muffins in it. She needed to bring the pumpkin muffins to her grandmas for Thanksgiving dinner. On the way over, she ate 2 of the muffins. How many pumpkin muffins did she bring to her grandmas?



8 Ellen needs 53 pounds of turkey to feed her large family for Thanksgiving. The first turkey is 23 pounds. The second turkey is 16 pounds. How much does the third turkey need to weigh?

