




9 Pippa needed to make 150 Thanksgiving placemats for the community dinner. So far, she made 48 and her friend who was helping her made 42. How many more placemats need to be made?




10 Danny brought 8 bags of corn muffins to his neighborhood's Thanksgiving dinner. Each bag has 8 corn muffins. Then his grandma baked 12 more muffins to bring. How many corn muffins did Danny bring to his neighborhood Thanksgiving dinner?



11 On Feather's Farm, there were a total of 230 turkeys. Farmer Bob brought 96 of the turkeys to the market on Saturday and 87 of the turkeys to the market on Sunday. How many turkeys were left on the farm?




12 There are 60 slices of pie. 26 of the slices are pumpkin and 22 are cherry. The rest of the slices are apple. How many slices are apple?




13


The Thanksgiving table was set for 220 people. There were 87 pilgrims and 97 Indians at the table. How many seats were not being used?

**14**

Sam's family had 6 people come over for Thanksgiving dinner. Each person made 2 side dishes. Sam's family made 3 side dishes. How many side dishes were there in all?

**15**

Samantha spent \$205 dollar at the grocery store for the Thanksgiving dinner. Greg has a smaller family and spent \$138. Selma only spent \$60. How much more did Samantha spend over Greg and Selma?

**16**

There are 60 slices of turkey on the platter. 34 slices were eaten on Thanksgiving and 9 were eaten the next day. The leftovers will go to turkey soup. How many slices will go to turkey soup?

