


**17**


Johnny's mom made 5 pies this year for Thanksgiving. Each pie has 6 slices. There were 5 slices of pie left over after Thanksgiving. How many slices were eaten?

**18**


Maria had 325 posters to hang for the pie eating contest. She hung 150 of them and her friend helped her hang another 130 of them. How many more posters do they still need to hang?

**19**

Martha's mom makes pies each year for Thanksgiving. This year, she made 6 pies. Each pie has 8 slices. 37 of the slices were eaten. How many slices were left?

**20**

Maranda's dad made 4 pumpkin rolls. Each roll had 8 slices in it. Maranda's family ate 23 slices. How many slices are left over?




**21**


There were a total of 100 posters to be hung up for the turkey eating contest. Mary hung 43 of them up on Monday and 39 of them up on Tuesday. How many more posters still need to be hung up?

**22**

There were 55 slices of turkey on the platter. The girls ate 22 pieces and the guys ate 29 pieces of turkey. How many pieces of turkey were left over?

**23**

Each farm had 8 turkeys on it. There were 5 farms. 2 turkeys escaped through an open gate. How many turkeys were left?

**24**

Danny spent \$64 on pies for Thanksgiving. Joan spent \$32 on pies and Denise spent \$20. How much more did Danny spend on pies over Joan and Denise?

