



1

Marty found 112 gold coins. Patty found 125 gold coins and Patrick found 346 gold coins. How many more gold coins did Patrick find over Marty and Patty combined?




2

Bridget made 72 shamrock shaped cookies. Her family ate 8 of them. She used the rest of them for a bake sale. If she divided up the remaining cookies into 8 baggies, how many cookies would be in each baggie?




3

The admission to the Lucky Leprechauns party was 2 canned goods that would be donated to the hunger center. There were 70 kids who showed up at the party, but 6 kids forgot to bring their 2 canned goods. How many canned goods were donated to the hunger center?




4

Patrick made 21 mini cupcakes. Sean made 14 mini cupcakes. They wanted to give the mini cupcakes equally to 7 of their friends. How many mini cupcakes did each friend get?




5

On Tuesday, Claire spent 30 minutes practicing her Irish dancing. On Wednesday, she spent 40 minutes and on Thursday, she spent double the time as Tuesday. How many minutes did she spend practicing her Irish dancing?




6

At the Lucky Leprechauns party, there were 40 green balloons, 40 orange balloons, and 40 white balloons. If 18 of them popped, how many were still floating?




7

Connor and Patrick each found 87 gold coins during St. Patrick's Day hunt. There were a total of 463 gold coins. How many gold coins were found by other kids?




8

At the Lucky Leprechauns party, there were 10 tables with 8 kids at each table. When it was limbo time, 63 kids got up to go limbo. How many kids were left sitting at the tables?




9

On Monday, Tara and Bridget each made 35 green cupcakes. On Tuesday, each of the girls made another 35 green cupcakes. How many green cupcakes were made in all by both girls?




10

At the St. Patrick's Day parade, there were 267 people wearing green, orange or white wigs. Tara counted 26 white wigs worn by people. Liam counted 78 orange wigs. How many green wigs would Sheila have counted to equal 267 wigs?



11

Connor and his mom made 100 shamrock cookies for school bake sale. When they were finished making them, they each ate 2 cookies. They divided up the rest of the cookies into 12 boxes. How many cookies were in each box?



12

In the green fields, Bridget picked 134 four-leaf clovers and Riley picked 38 more than Bridget. How many four-leaf clovers did they pick in all?

