


**1** Luella had 18 sunflower seeds. Her mom gave her 18 more sunflower seeds. She wanted to share these equally with her 4 friends. How many sunflower seeds did each of her friends get?




**2** My mom bought me a new raincoat for \$24, rain boots for \$27 and an umbrella for \$8. If she paid with \$100, how much change did she get back?




**3** Bobby saw 7 ladybugs with 8 spots on each. Joey saw 25 spots total on the ladybugs he saw. How many spots did Bobby and Joey see in all?



**4** Clare saw 32 birds flying in the air. Jose also saw 32 birds. If all the birds flew equally into 8 bird houses, how many birds went into each birdhouse?




**5** My grandma's gardening club planted 257 flowers on Saturday. On Sunday, they planted 187. If they wanted to plant 500 flowers, how many flowers do they still need to plant?




**6** It was predicted to be the worst April on record for rain and in the United States there would be an estimated 430 inches of rain total from all the states. The first week there was 137 inches of rain. The second week there was 95 and the third week there was 103. How many inches of rain was there during the last week of April?



**7** Joyce saw 14 ladybugs and Janie saw 21 ladybugs. If they wanted to split them equally into 5 ladybug houses, how many ladybugs would go in each ladybug house?



**8** Our community is having a bird exhibit in the spring to show off all the different species of birds that live around us. We needed to hang 700 posters for this event. On the first evening, we hung 296 posters. On the second night, we hung 303 posters. How many posters do we still need to hang?




**9** Samantha planted 42 geraniums. Samantha's mom planted 26 more geraniums than Samantha. How many geraniums did they plant in all?



**10** Maria liked to collect rain and measure it. She had 7 jars and in each jar she measured 6 inches. Her best friend came over with a jar that held 12 inches. How many inches of rain did they collect in all?



**11** 600 people went to watch the new Insect movie over the weekend. On Friday, 198 people watched it. On Saturday, 219 people watched it. How many people went to see it on Sunday?



**12** At the bluejay bird exhibit, there are 243 birds. At the cardinal bird exhibit, there are 167 birds and at the woodpecker bird exhibit, they have 32 more birds than the cardinal bird exhibit has. How many birds are there in all at the 3 different bird exhibits?

