

13


Jenny wanted to have all her flowers planted in 4 days. She had bought 50 flowers. By the time she went to plant them, 6 of them had died. If she wanted to plant the same amount of flowers each day, how many will she plant?

**14**


Josie caught 24 inches of rain in her canister and her friend caught 21 inches of rain. If they wanted to divide up the rain into 5 jars, how many inches of rain would go in each jar?

**15**

Jasmine counted 132 ants that crawled out of the ant hill. Jimmy counted 87 and Sammy counted 15 more than Jimmy. How many ants came out of the ant hill?

**16**

Each day the zoo received 9 new birds. This happened for 4 days. If they want to build enough birdhouses so that 3 birds can go into each house, how many birdhouses do they need to build?



17


Mary planted 12 flowers each day for 6 days. On the 7th day, she planted 8 flowers. How many flowers did she plant in all?

**18**


My family went to Washington for vacation. As we got there, we realized we didn't pack our umbrellas. Mom had \$50 in her pocket. She bought 6 umbrellas for \$6 each. How much change did she get back?

**19**

Ava saw a total of 63 insects in the insect garden. There were 27 ladybugs and 18 butterflies. The rest were ants. How many ants did she see?

**20**

My dad and I wanted to make 3 birdhouses. We were making one for our house, one for our neighbor and one for my best friend. The wood cost \$28, paint cost \$19 and the rest of the materials cost \$23. My dad paid with \$100. How much change did he get back?




21 Miranda had 32 flower seeds and her friend Stella had 24 seeds. If they wanted to divide up the seeds with 8 friends, how many seeds does each friend get?



22 During the month of March it rained a total of 37 inches. In April it rained a total of 20 inches and in May it rained 10 fewer inches than April. How many inches did it rain during March, April and May?



23 My family wanted to go see the insect exhibit at the zoo. My mom bought 2 adult tickets for a total of \$24. Then she spent \$18 total on the kids. If she paid with \$60, how much change did she get back?



24 My family went to a bird exhibit during our vacation. There are 6 kids in the family and each kids ticket cost \$8. It cost a total of \$24 for my parents to get in. How much did it cost in all for my family to go to the bird exhibit?

