




13 Lydia's mom bought a mega pack of Valentine's pencils for her to share with her class. The pack contained 55 pencils. Kayla's mom bought 25 pencils for her to share with classmates. Lydia and Kayla are in the same class and there are 20 kids in the class. How many pencils does each student get?




14 The class goal for the month of February was to read for 300 minutes. Owen read 80 minutes each week for the four weeks in February. Did he accomplish the goal? How many minutes was he under or over?




15 Marcus made 24 mini cookies and Phillip made 20 mini cookies. They wanted to divide those up with 4 friends. How many mini cookies does each friend get?




16 Sophia bought a Valentine's movie for \$13.00, cookies for \$6.00 and a box of chocolates for \$12.00. If she paid with \$50.00, how much change does she get back?




17 James had 2 large bags of candy to use in treat bags for his class. If there were 95 pieces in each bag and James and his family ate 15 pieces before he made the treat bags, how many pieces does he have left to use?




18 Alexis, Margaret and Sal each made 34 valentines for the nursing home. There were 87 clients living in the nursing home. How many extra valentines were there?




19 Marcus received 28 pieces of candy from his mom for Valentine's Day. Stiven received 35 pieces of candy from his mom for Valentine's Day. If they wanted to put their candy together into groups of 7's, how many groups would they have?




20 Benjamin spent \$34.00 on a necklace for his mom and \$22.00 for a bracelet for his grandmother for Valentine's Day. If he earns \$8.00 a week for his allowance, how many weeks did he have to save up for the necklace and bracelet?




21 Lydia spent 58 minutes on Tuesday reading a Valentine's Day mystery book. On Wednesday, she spent 42 minutes reading it and on Thursday, she spent 20 minutes more than Wednesday reading it. How long did she spend reading the book?



22 Abigail's family went out to eat on Valentine's Day and spent \$123.00. Quinn's family spent \$28.87 less than Abigail's family. How much did the two families spend in all?



23 At the Sweetheart Dance there were 8 tables with 8 kids at each table. When they announced the dessert table was ready, 53 kids got up right away to get some treats. How many kids were still sitting at the table?



24 Isabelle had 48 mini heart stickers but gave 12 to Sophia. Scarlett gave 14 of her rainbow stickers to Isabelle. How many stickers does Isabelle have now?

