




**1** Nickolas sold 12 mini cupcakes that cost \$1.00 each. He also sold 8 large cupcakes that cost \$3 each. How much did Nickolas make?




**2** Abigail gave Valentine's Day treat bags to her 7 friends in the neighborhood. Then she gave 3 treat bags to her cousins. If each treat bag had 8 pieces of candy in it, how many pieces did she use in all for the treat bags?




**3** Jessica's mom had 3 passes to the Sweetheart Skating event. Each pass allowed 4 people to enter. If Jessica wanted to invite 16 people, how many more passes would her mom need?




**4** There were 268 girls and 177 boys at the Valentine's Day cookie decorating contest. 500 cookies were bought for the event. How many cookies were not used?




- 5** Addison made 20 chocolate covered strawberries, 20 white chocolate covered strawberries and 20 peanut butter covered strawberries. If she put 10 strawberries in each box, how many boxes would she need?




- 6** Sharbel ate 3 packets of heart shaped fruit snacks. Each packet had 12 fruit snacks in it. Jessica also ate 3 packets of the same fruit snacks. How many fruit snacks were eaten in all?



- 7** Nickolas and Kelly Jo each spent 2 hours decorating their Valentine's boxes for their school party. Quinn spent double the time on his box as Kelly Jo or Nickolas. How long did the 3 kids spend decorating their Valentine's box?




- 8** Isabelle gave her teacher, Miss Lehman, a mega box of chocolates that had 72 pieces in it. Collin gave Miss Lehman a box of chocolates with 24 pieces and Margaret gave a box of chocolates that had double the amount of Collin's. How many pieces of chocolate did Miss Lehman get?




**9**


Abigail made 6 baking sheets of Cupid cookies. Each baking sheet had 12 Cupid cookies on it. After they cooled, she put them in a container but accidentally dropped 8 cookies. How many Cupid cookies does she have now?

**10**

Kayla's family went to the movies on Valentine's Day to see a movie. It cost \$10 each for her mom and dad and \$8 dollars for each kid. If there are 3 kids in her family, how much did it cost to go to the movies?

**11**

Collin made 32 heart shaped cookies. Stella made 16 heart shaped cookies. They wanted to divide these cookies between their 8 friends. How many cookies does each friend get?

**12**

Collin and Owen each brought in 2 dozen heart shaped donuts for their class party. Lydia also brought in 24 mini heart shaped donuts. How many donuts were at the party in all?

