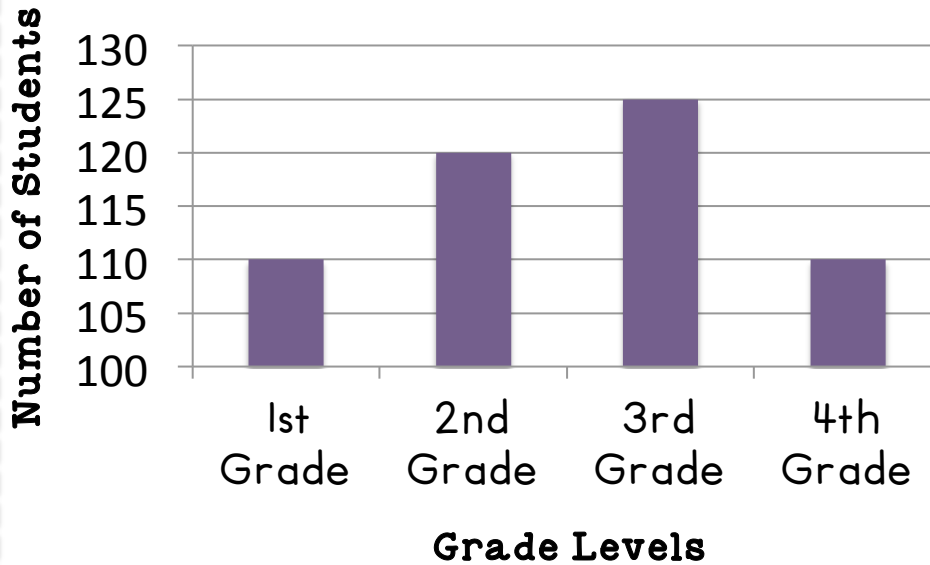


## Bar Graphs

## Card 13

**Students at Parkview Elementary**



Which two grade levels have an equal amount of students?

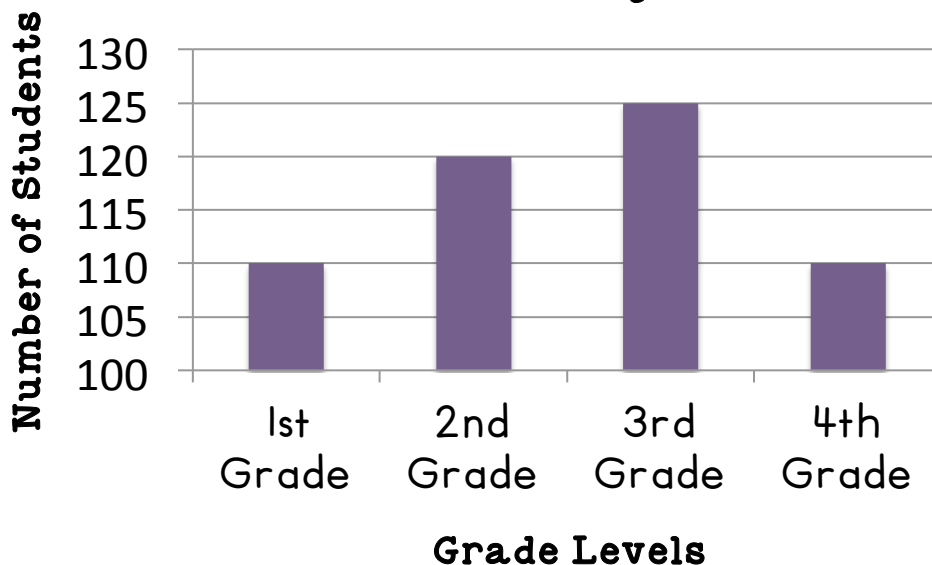
- a. 1<sup>st</sup> grade and 2<sup>nd</sup> grade
- b. 3<sup>rd</sup> grade and 2<sup>nd</sup> grade
- c. 1<sup>st</sup> grade and 4<sup>th</sup> grade
- d. 4<sup>th</sup> grade and 2<sup>nd</sup> grade

© The Tulip Teacher 2015

## Bar Graphs

## Card 14

**Students at Parkview Elementary**



How many students are in 1<sup>st</sup> grade, 2<sup>nd</sup> grade, and 4<sup>th</sup> grade?

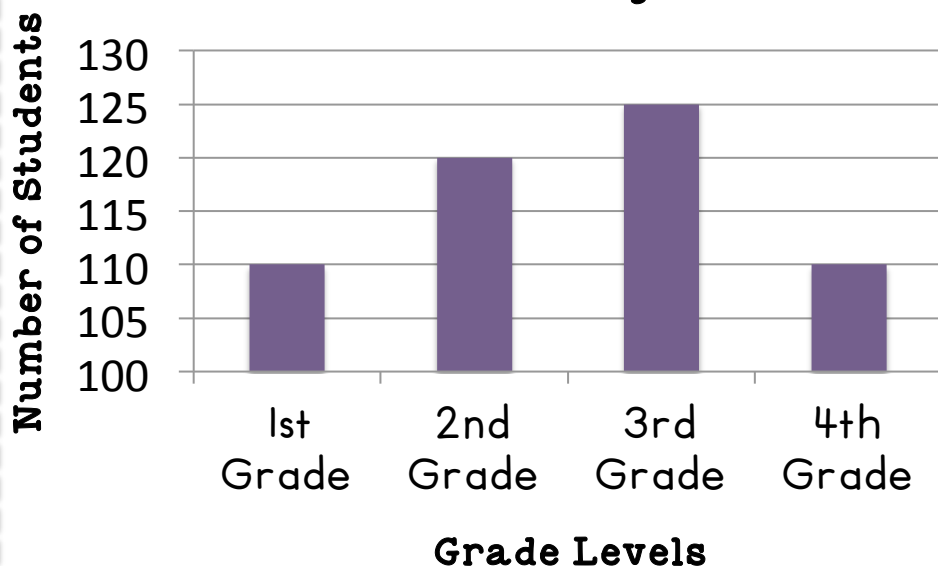
- a. 355
- b. 230
- c. 340
- d. 300

© The Tulip Teacher 2015

## Bar Graphs

## Card 15

**Students at Parkview Elementary**



How many more students are in 3<sup>rd</sup> grade than in 1<sup>st</sup> grade at Parkview Elementary?

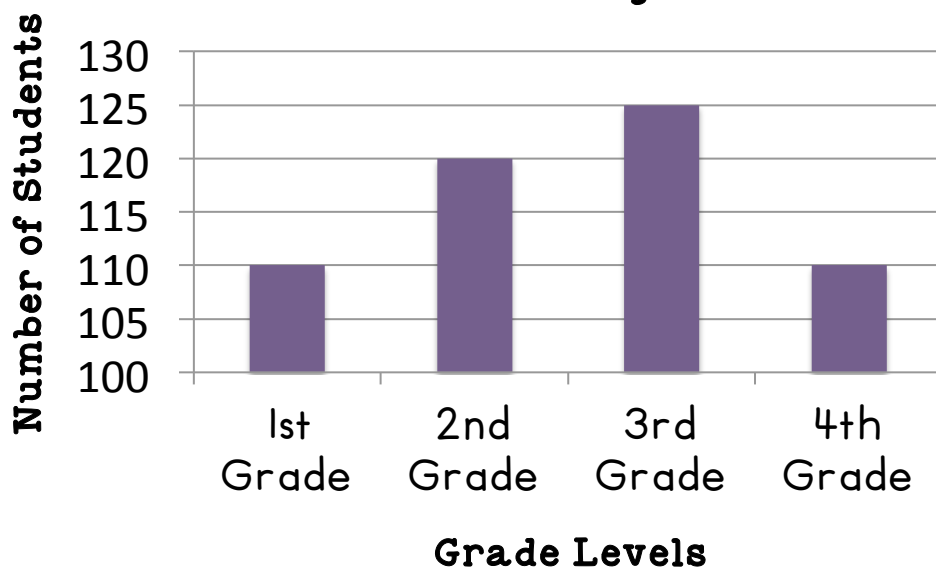
- a. 10
- b. 50
- c. 20
- d. 15

© The Tulip Teacher 2015

## Bar Graphs

## Card 16

**Students at Parkview Elementary**



How many students are in all of the grade levels at Parkview Elementary School?

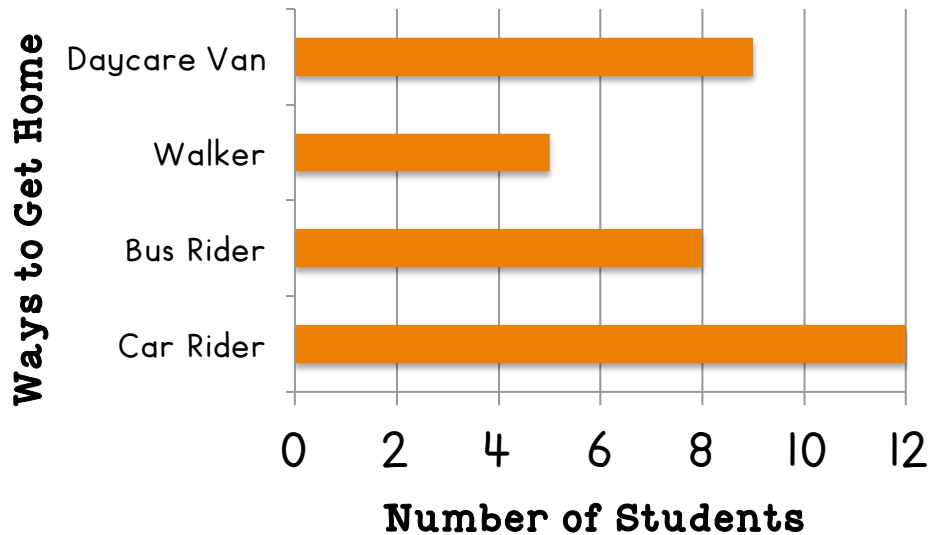
- a. 125
- b. 455
- c. 465
- d. 150

© The Tulip Teacher 2015

## Bar Graphs

## Card 17

**How Mrs. Vance's Students Get Home**



How many students are in Mrs. Vance's class?

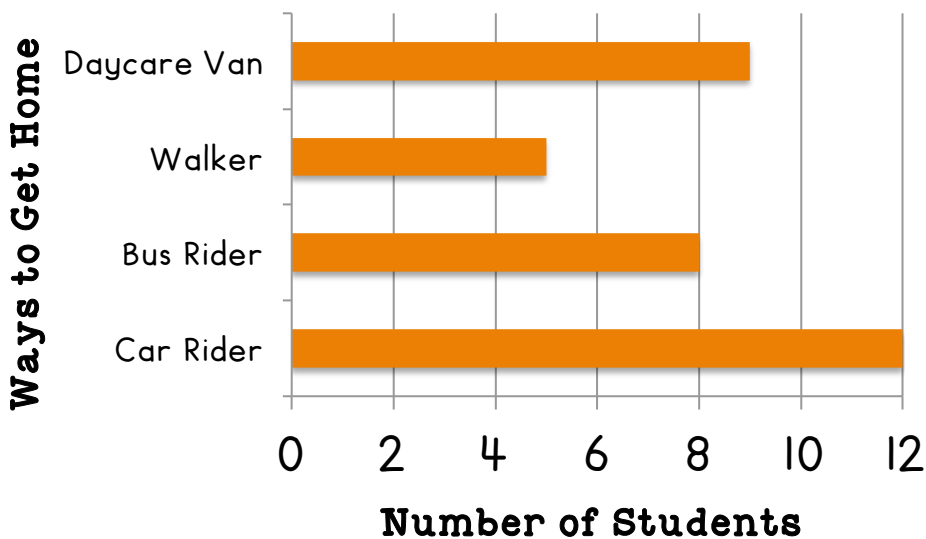
- a. 26
- b. 34
- c. 32
- d. 30

© The Tulip Teacher 2015

## Bar Graphs

## Card 18

**How Mrs. Vance's Students Get Home**



How many students are car riders, walkers, or bus riders?

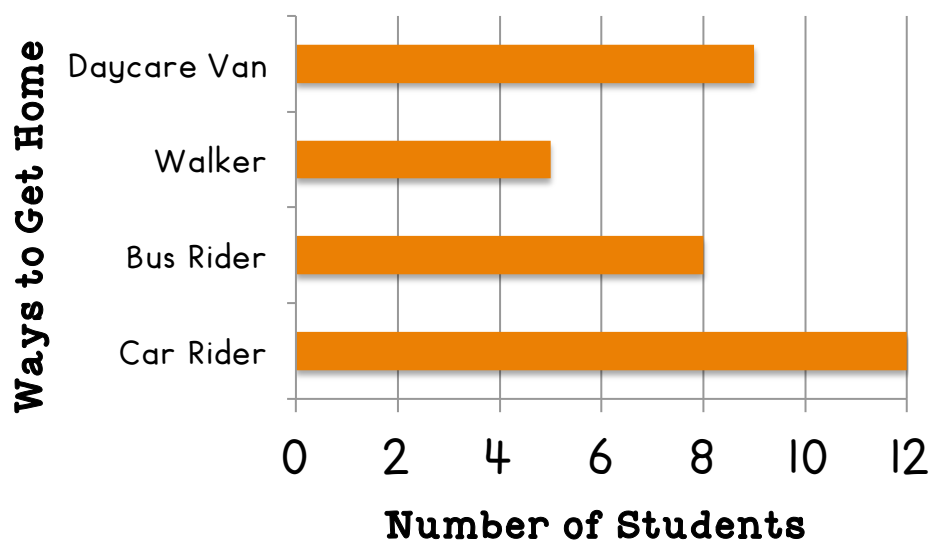
- a. 17
- b. 20
- c. 29
- d. 25

© The Tulip Teacher 2015

## Bar Graphs

## Card 19

**How Mrs. Vance's Students Get Home**



How many more students are car riders or daycare van riders than walkers?

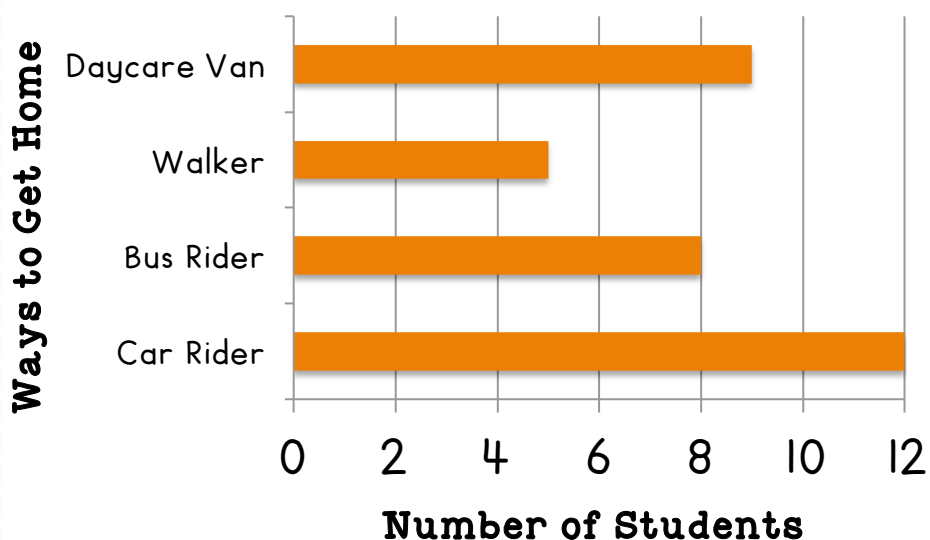
- a. 21
- b. 7
- c. 16
- d. 15

© The Tulip Teacher 2015

## Bar Graphs

## Card 20

**How Mrs. Vance's Students Get Home**



How do most students get home in Mrs. Vance's class?

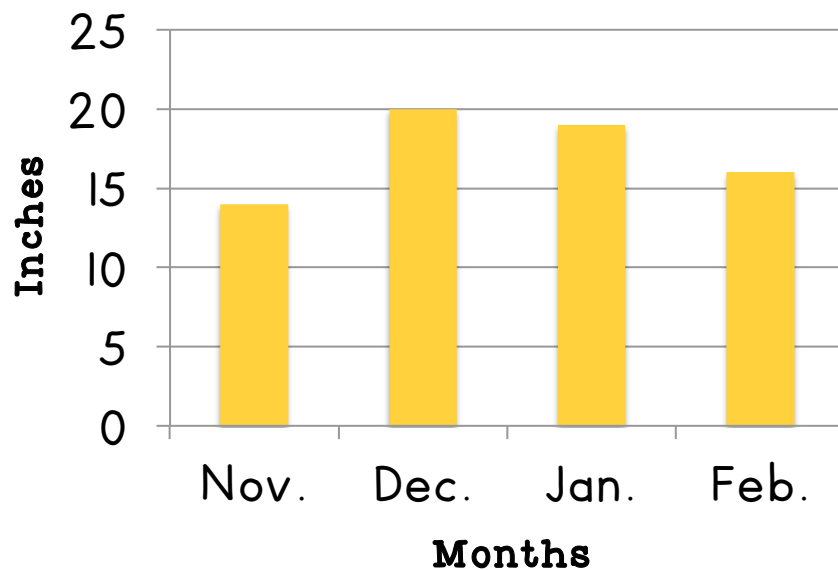
- a. daycare van
- b. walker
- c. bus rider
- d. car rider

© The Tulip Teacher 2015

## Bar Graphs

## Card 21

**Amount of Rain**



Which month received the most rain?

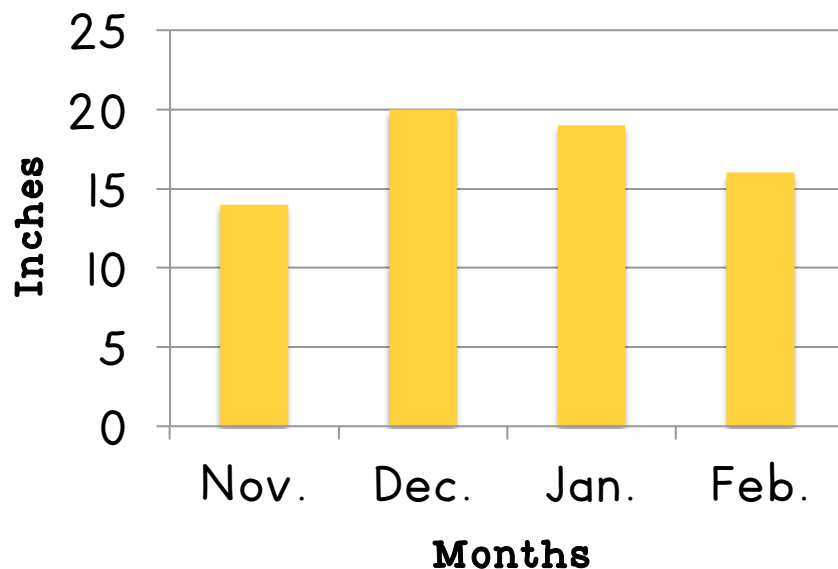
- a. November
- b. December
- c. January
- d. February

© The Tulip Teacher 2015

## Bar Graphs

## Card 22

**Amount of Rain**



How much rain fell in all four months on the bar graph?

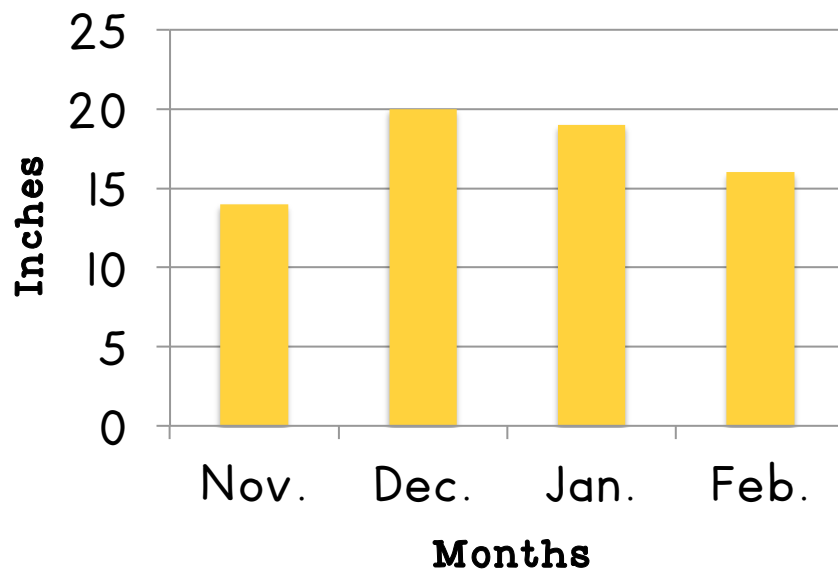
- a. 70 inches
- b. 69 inches
- c. 45 inches
- d. 72 inches

© The Tulip Teacher 2015

## Bar Graphs

### Card 23

**Amount of Rain**



What unit is used to measure the amount of rain that fell in the four months?

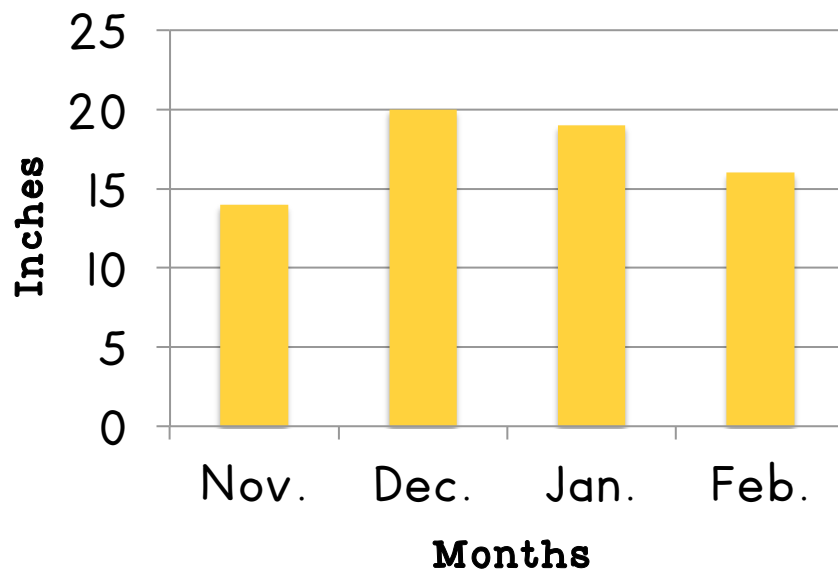
- a. feet
- b. inches
- c. yard
- d. centimeters

© The Tulip Teacher 2015

## Bar Graphs

### Card 24

**Amount of Rain**



How much more rain fell in December than in February?

- a. 10 inches
- b. 24 inches
- c. 34 inches
- d. 4 inches

© The Tulip Teacher 2015