

TEST NAME: **Rockwell Telling Time Brain Breakfast**
TEST ID: **2985531**
GRADE: **03 - Third Grade**
SUBJECT: **Mathematics**
TEST CATEGORY: **My Classroom**

Student: _____
Class: _____
Date: _____

1. Parker arrived at school at 8:10 a.m. The bell rang 10 minutes later for announcements. What time did the bell ring?
 - A 8:00 a.m.
 - B 8:10 a.m.
 - C 8:20 a.m.
 - D 8:25 a.m.

2. Scott gets to school at 8:00 a.m. For morning work, he works on math for 10 minutes, reading for 15 minutes, and his spelling for 15 minutes. At what time does Scott finish all of his morning work?
 - A 8:10 a.m.
 - B 8:15 a.m.
 - C 8:35 a.m.
 - D 8:40 a.m.

3. Which of the following clocks read 7:14?

A.



B.



C.



D.



4. Mack started eating lunch at 12:00 p.m. He finished eating at 12:35 p.m. How much time did Mack spend eating lunch?

- A. 25 minutes
- B. 30 minutes
- C. 35 minutes
- D. 45 minutes

5. Javier spent 18 minutes at the store. He left the store at 4:27. At what time did he get to the store?


A 4:09
B. 4:19
C. 4:25
D. 4:45

6. Using the clock below, what time was it 21 minutes ago?



A 11:10
B. 11:11
C. 11:52
D. 11:53

7. What time is shown on the clock below?



- A. 9:40
- B. 8:45
- C. 8:09
- D. 7:45

8. Which clock below shows 5:30?

A.



B.



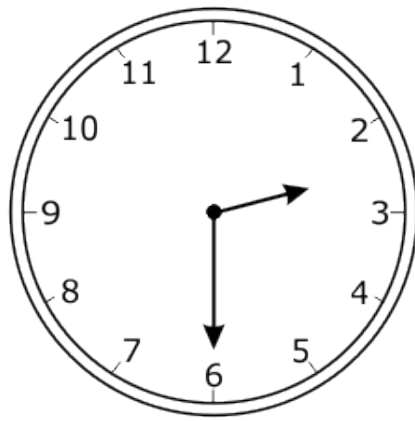
C.



D.




9. The clock below shows when basketball practice starts. Basketball practice is 25 minutes long.

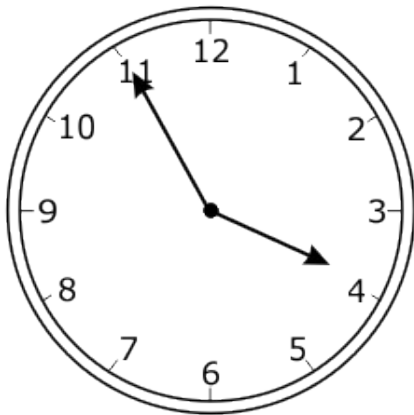


Which clock shows the time basketball practice ends?


A.



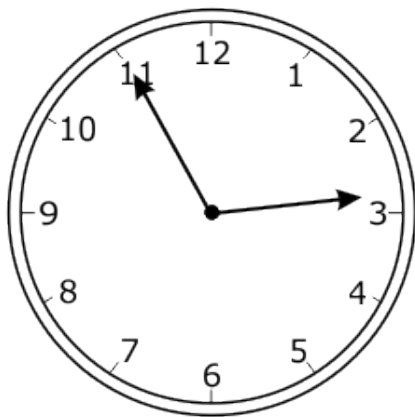
B.



C.



D.



10. Which of the following clocks read 6:37?

A.



B.



C.



D.



11. Ms. Johnson's class schedule lists the beginning time for each of her daily activities.

Ms. Johnson's Class Schedule

8:00	Journals
8:20	Math
10:00	Art
10:45	Science
11:45	Lunch
12:15	Recess
12:45	Language Arts
2:30	Library
2:50	Dismissal

How many minutes pass from the time when recess begins to the time when Language Arts begins?

- A. 15 minutes
- B. 30 minutes
- C. 45 minutes
- D. 60 minutes

12. Which clock reads 11:10?

A.



B.



C.



D.



13. The test began at the time shown on the clock.



What time did the test begin?

- A. 6:10
 - B. 6:50
 - C. 10:06
 - D. 10:30
14. Pamela put a cherry pie into the oven at 11:15 a.m. She took it out at 11:45 a.m. How long was the pie in the oven?
- A. 15 minutes
 - B. 30 minutes
 - C. 35 minutes
 - D. 45 minutes

15. Which of the following clocks read 9:16?

A.



B.



C.

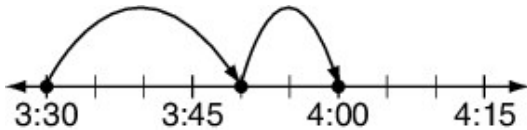


D.

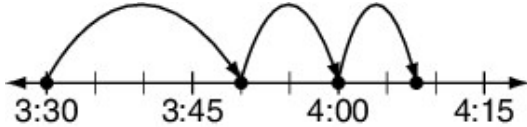


16. Janelle began her homework at 3:30 p.m. She read for 20 minutes and then practiced her math facts for 10 minutes. Then she spent 8 minutes doing her science homework. Which diagram shows the time Janelle spent doing homework?

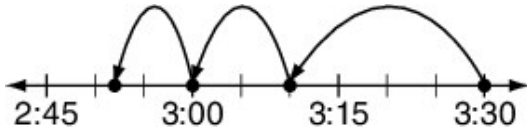
A.



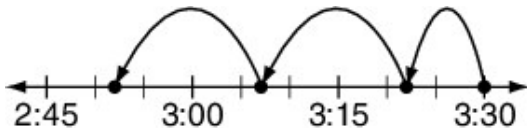
B.



C.



D.



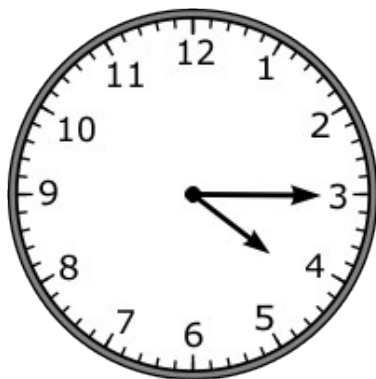
17. Katherine left her house at 2:00 p.m. to go to a race.

- First, she drove 10 minutes to meet a friend.
- Next, she drove 15 minutes to the supermarket to buy a drink.
- Finally, she drove 30 minutes to the race.

What time did Katherine get to the race?

- A. 12:55 p.m.
- B. 2:25 p.m.
- C. 2:30 p.m.
- D. 2:55 p.m.

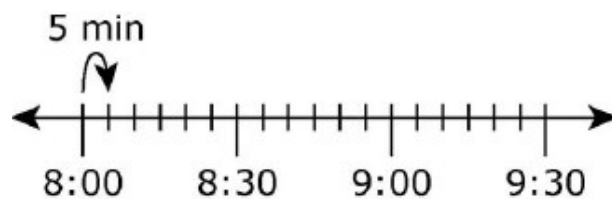
18. Michael's piano lesson begins at the time shown on the clock below.



What time does his piano lesson begin?

- A. 3:20
- B. 4:00
- C. 4:15
- D. 5:15

19. Hector had a piano lesson at 4:00 p.m. It takes him 30 minutes to walk from his house to the piano teacher's house. What is the latest time Hector could leave his house and get to his lesson on time?
- A. 3:00 p.m.
B. 3:30 p.m.
C. 3:40 p.m.
D. 3:45 p.m.
20. Ashton is training for a race. He starts running at 8:15 a.m. He takes a break after running for 45 minutes.



Which time shows when Ashton took a break?

- A. 8:40 a.m.
B. 8:45 a.m.
C. 9:00 a.m.
D. 9:15 a.m.
21. Sara's bus leaves school at 2:40 p.m. and then drives for 22 minutes to get to her house. What time does the bus arrive at Sara's house?
- A. 2:02 p.m.
B. 2:18 p.m.
C. 2:62 p.m.
D. 3:02 p.m.

22. What time is shown on the clock?



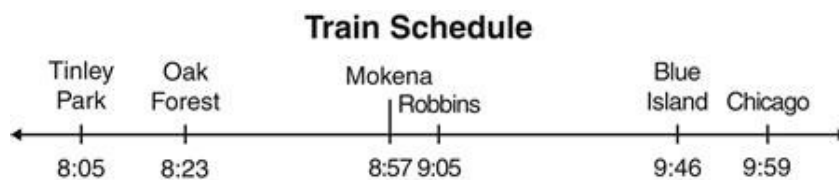
- A. 7:35
- B. 8:41
- C. 9:33
- D. 10:47

23. Which of the following times match the clock?



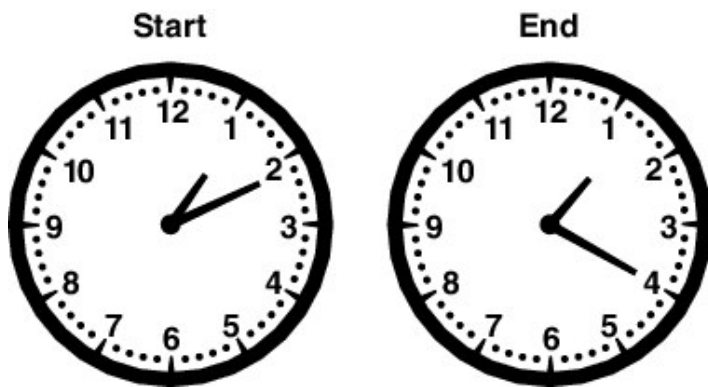
- A. 1:15
- B. 2:45
- C. 3:20
- D. 3:45

24. How many minutes does it take the Chicago train to travel from Robbins to Blue Island?



- A. 18 minutes
- B. 34 minutes
- C. 41 minutes
- D. 54 minutes

25. The clocks below show how long it took Kay to ride her bike around the block.



How long did it take Kay to ride her bike around the block?

- A. 2 minutes
- B. 9 minutes
- C. 19 minutes
- D. 20 minutes

26. Trevor has a game at fifteen minutes after ten. Which clock shows the time for Trevor's game?

A.



B.



C.



D.



27. The first graders began a project at 11:25 a.m. They finished the project at 11:45 a.m. How long did the first graders spend on the project?

- A. 15 minutes
- B. 20 minutes
- C. 35 minutes
- D. 45 minutes

28. Which clock BEST represents the time shown on the digital clock?

6:55

A.



B.



C.



D.



29. Mandy leaves her house at 7:40 to walk to school each day. She arrives at school at 7:50. She walks back home again each afternoon. How many minutes does Mandy walk to school and back home each day?
- A. 5 minutes
B. 10 minutes
C. 20 minutes
D. 40 minutes
30. Marsha practices the piano from 11:05 a.m. to 12:00 p.m. During that time, she stops to play the flute for 10 minutes. How much time does Marsha spend practicing the piano?
- A. 5 minutes
B. 10 minutes
C. 45 minutes
D. 55 minutes
31. It takes Jordan 3 minutes to complete 10 free throws at practice. The clock below shows the time when Jordan finished 10 free throws.



Jordan will continue to shoot free throws at the same rate. Which clock shows the time closest to when Jordan will complete 50 more free throws?

A.



B.



C.



D.



32. Brad's hockey game began at the time shown below. The game ended 40 minutes later.



Which clock shows the time the game ended?

A.



B.



C.



D.



33. Dalia started walking her dog at 6:10 p.m. She finished the walk at 6:45 p.m. How much time did Dalia spend walking her dog?

- A. 10 minutes
- B. 30 minutes
- C. 35 minutes
- D. 45 minutes

34. What time does the clock below show?



- A 3:52
- B 4:52
- C 10:19
- D 11:19


35. Hannah practiced her piano lessons for 35 minutes. She started at 3:15. At what time did she finish?

- A 2:40
- B 3:45
- C 3:50
- D 3:55

36. Sherry began exercising at 6:20 p.m. She exercised for 27 minutes. What time did Sherry stop exercising?

- A 6:57 p.m.
- B 6:47 p.m.
- C 5:55 p.m.
- D 5:53 p.m.

37. What time is shown on the clock below?



- A. 2:10
- B. 2:35
- C. 7:10
- D. 7:15

38. When Bentley got home from school, the clock showed the following time.



Bentley needs to leave for baseball practice in an hour and a half. What time does he need to leave for baseball practice?

- A. 5:07 p.m.
- B. 5:17 p.m.
- C. 5:27 p.m.
- D. 5:37 p.m.

39. Jason's soccer game will start between 5:00–5:40 p.m. Which clock shows a time his game could start?

A.



B.



C.



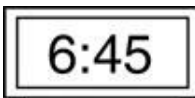
D.



40. Maria went to the store at 3:00. She stayed until 3:45. How long was she at the store?

- A. 10 minutes
- B. 30 minutes
- C. 45 minutes
- D. 50 minutes

41. Which **BEST** represents the time shown on the digital clock?



A.



B.




C.



D.



42. Yasir watched a 20-minute video. The clock shows the time that the video stopped.



What time did the video start?

- A. 3:02
 - B. 3:12
 - C. 3:42
 - D. 3:52
43. Miguel looked at the clock when he got up in the morning. It looked like this.



What time was it?

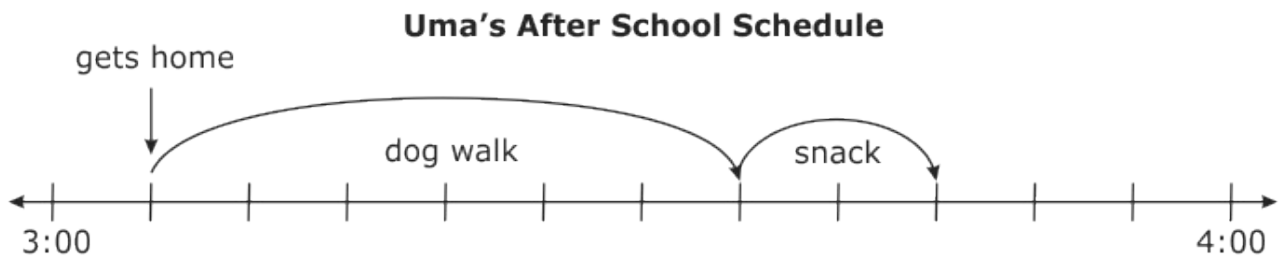
- A. 7:30 a.m.
- B. 8:30 a.m.
- C. 7:30 p.m.
- D. 8:30 p.m.

44. When school begins in the morning, the clock looks like this.



What time does school begin?

- A. 8:15 p.m.
 - B. 9:15 p.m.
 - C. 8:15 a.m.
 - D. 9:15 a.m.
45. Uma can begin her homework after she has walked the dog and eaten a snack. She made a number line to keep track of her time after school.



What is the earliest time Uma can begin her homework?

- A. 3:45
- B. 3:35
- C. 3:30
- D. 2:35

46. Kathy woke at 7:15 a.m. She got on the school bus at 7:49 a.m. How much time did Kathy have to get ready for school before the bus came?
- A. 49 minutes
B. 34 minutes
C. 30 minutes
D. 29 minutes
47. Arvind took a 45-minute walk at the park. He started at 7:05. What time did Arvind finish his walk?
- A. 6:20
B. 7:45
C. 7:50
D. 8:00

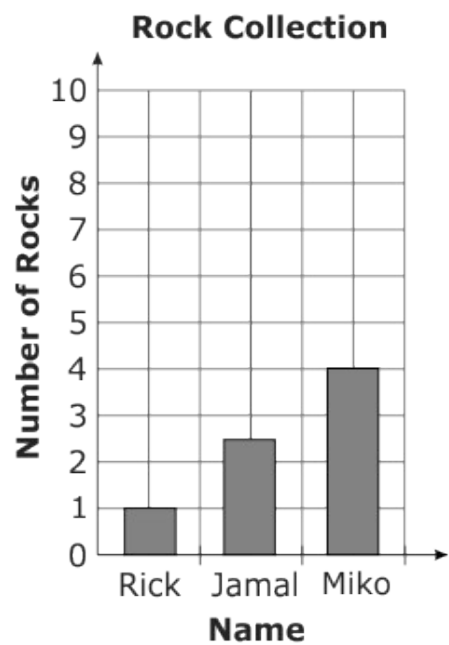
48. What time does the clock show?



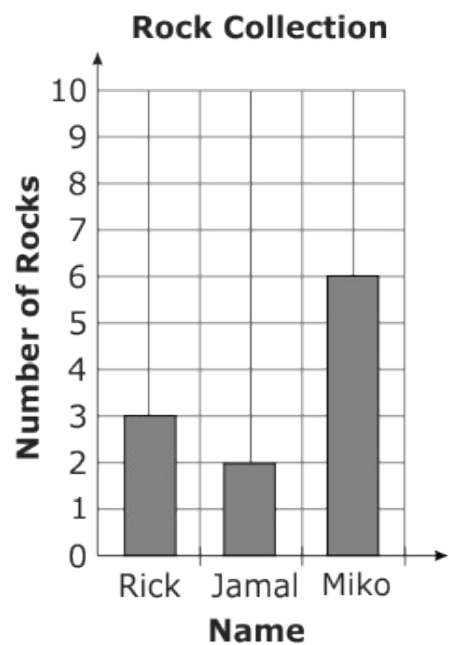
- A. 1:46
B. 9:04
C. 10:04
D. 12:46
49. Rick, Jamal, and Miko found rocks when they went hiking.
- Rick found six rocks.
 - Jamal found seven rocks.
 - Miko found eight rocks.

Which graph shows the total number of rocks each person found?

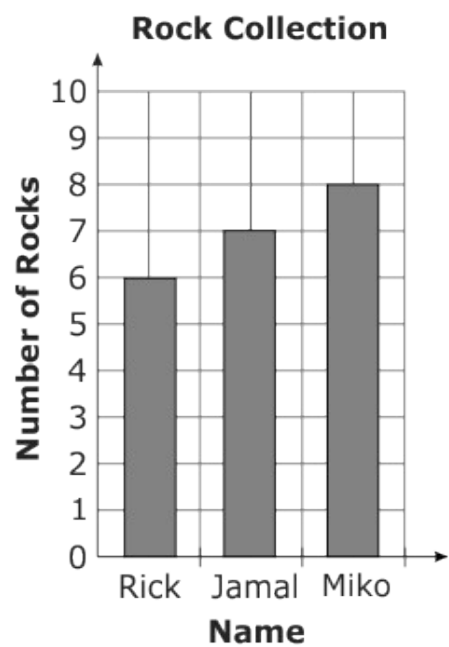
A.



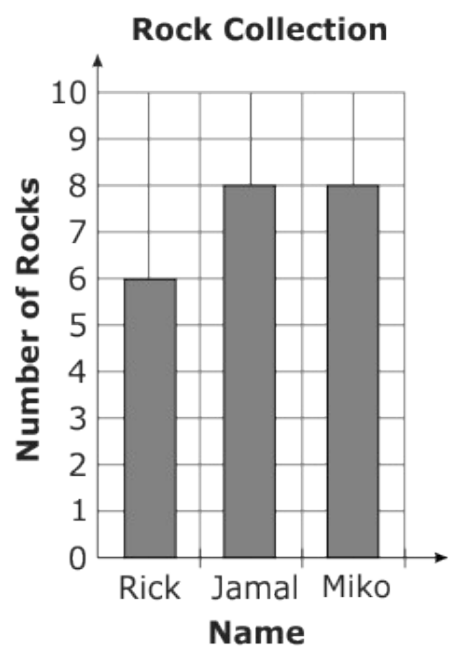
B.



C.



D.



50. What time is shown on the clock?



- A. 3:50
- B. 4:45
- C. 5:59
- D. 6:50