

# Fact Families

Write the fact families for the 3 numbers in each house.

16

2 8

___	x	___	=	___
___	x	___	=	___
___	÷	___	=	___
___	÷	___	=	___

6

2 3

___	x	___	=	___
___	x	___	=	___
___	÷	___	=	___
___	÷	___	=	___

10

2 5

___	x	___	=	___
___	x	___	=	___
___	÷	___	=	___
___	÷	___	=	___

12

2 6

___	x	___	=	___
___	x	___	=	___
___	÷	___	=	___
___	÷	___	=	___

14

2 7

___	x	___	=	___
___	x	___	=	___
___	÷	___	=	___
___	÷	___	=	___

8

2 4

___	x	___	=	___
___	x	___	=	___
___	÷	___	=	___
___	÷	___	=	___

# Fact Families

Write the fact families for the 3 numbers in each house.

12

3 4

___	x	___	=	___
___	x	___	=	___
___	÷	___	=	___
___	÷	___	=	___

18

3 6

___	x	___	=	___
___	x	___	=	___
___	÷	___	=	___
___	÷	___	=	___

24

3 8

___	x	___	=	___
___	x	___	=	___
___	÷	___	=	___
___	÷	___	=	___

15

3 5

___	x	___	=	___
___	x	___	=	___
___	÷	___	=	___
___	÷	___	=	___

21

3 7

___	x	___	=	___
___	x	___	=	___
___	÷	___	=	___
___	÷	___	=	___

27

2 9

___	x	___	=	___
___	x	___	=	___
___	÷	___	=	___
___	÷	___	=	___

# Fact Families

Write the fact families for the 3 numbers in each house.

20

4 5

___	x	___	=	___
___	x	___	=	___
___	÷	___	=	___
___	÷	___	=	___

48

4 12

___	x	___	=	___
___	x	___	=	___
___	÷	___	=	___
___	÷	___	=	___

32

4 8

___	x	___	=	___
___	x	___	=	___
___	÷	___	=	___
___	÷	___	=	___

36

4 9

___	x	___	=	___
___	x	___	=	___
___	÷	___	=	___
___	÷	___	=	___

28

4 7

___	x	___	=	___
___	x	___	=	___
___	÷	___	=	___
___	÷	___	=	___

24

4 6

___	x	___	=	___
___	x	___	=	___
___	÷	___	=	___
___	÷	___	=	___

# Fact Families

Write the fact families for the 3 numbers in each house.

25

5 5

___	x	___	=	___
___	x	___	=	___
___	÷	___	=	___
___	÷	___	=	___

55

5 11

___	x	___	=	___
___	x	___	=	___
___	÷	___	=	___
___	÷	___	=	___

45

5 9

___	x	___	=	___
___	x	___	=	___
___	÷	___	=	___
___	÷	___	=	___

30

5 6

___	x	___	=	___
___	x	___	=	___
___	÷	___	=	___
___	÷	___	=	___

40

5 8

___	x	___	=	___
___	x	___	=	___
___	÷	___	=	___
___	÷	___	=	___

35

5 7

___	x	___	=	___
___	x	___	=	___
___	÷	___	=	___
___	÷	___	=	___

# Fact Families

Write the fact families for the 3 numbers in each house.

18

6 3

___	x	___	=	___
___	x	___	=	___
___	÷	___	=	___
___	÷	___	=	___

42

6 7

___	x	___	=	___
___	x	___	=	___
___	÷	___	=	___
___	÷	___	=	___

54

6 9

___	x	___	=	___
___	x	___	=	___
___	÷	___	=	___
___	÷	___	=	___

36

6 6

___	x	___	=	___
___	x	___	=	___
___	÷	___	=	___
___	÷	___	=	___

72

6 12

___	x	___	=	___
___	x	___	=	___
___	÷	___	=	___
___	÷	___	=	___

48

6 8

___	x	___	=	___
___	x	___	=	___
___	÷	___	=	___
___	÷	___	=	___

# Fact Families

Write the fact families for the 3 numbers in each house.

49

7 7

___	x	___	=	___
___	x	___	=	___
___	÷	___	=	___
___	÷	___	=	___

21

7 3

___	x	___	=	___
___	x	___	=	___
___	÷	___	=	___
___	÷	___	=	___

56

7 8

___	x	___	=	___
___	x	___	=	___
___	÷	___	=	___
___	÷	___	=	___

42

7 6

___	x	___	=	___
___	x	___	=	___
___	÷	___	=	___
___	÷	___	=	___

63

7 9

___	x	___	=	___
___	x	___	=	___
___	÷	___	=	___
___	÷	___	=	___

28

7 4

___	x	___	=	___
___	x	___	=	___
___	÷	___	=	___
___	÷	___	=	___

# Fact Families

Write the fact families for the 3 numbers in each house.

56

8 7

___	x	___	=	___
___	x	___	=	___
___	÷	___	=	___
___	÷	___	=	___

24

8 3

___	x	___	=	___
___	x	___	=	___
___	÷	___	=	___
___	÷	___	=	___

64

8 8

___	x	___	=	___
___	x	___	=	___
___	÷	___	=	___
___	÷	___	=	___

40

8 5

___	x	___	=	___
___	x	___	=	___
___	÷	___	=	___
___	÷	___	=	___

72

8 9

___	x	___	=	___
___	x	___	=	___
___	÷	___	=	___
___	÷	___	=	___

32

8 4

___	x	___	=	___
___	x	___	=	___
___	÷	___	=	___
___	÷	___	=	___

# Fact Families

Write the fact families for the 3 numbers in each house.

27

9 3

___	x	___	=	___
___	x	___	=	___
___	÷	___	=	___
___	÷	___	=	___

45

9 5

___	x	___	=	___
___	x	___	=	___
___	÷	___	=	___
___	÷	___	=	___

72

9 8

___	x	___	=	___
___	x	___	=	___
___	÷	___	=	___
___	÷	___	=	___

81

9 9

___	x	___	=	___
___	x	___	=	___
___	÷	___	=	___
___	÷	___	=	___

54

9 6

___	x	___	=	___
___	x	___	=	___
___	÷	___	=	___
___	÷	___	=	___

36

9 4

___	x	___	=	___
___	x	___	=	___
___	÷	___	=	___
___	÷	___	=	___



# Fact Families

Write the fact families for the 3 numbers in each house.

30

10 3

_____	x	_____	=	_____
_____	x	_____	=	_____
_____	÷	_____	=	_____
_____	÷	_____	=	_____

50

10 5

_____	x	_____	=	_____
_____	x	_____	=	_____
_____	÷	_____	=	_____
_____	÷	_____	=	_____

100

10 10

_____	x	_____	=	_____
_____	x	_____	=	_____
_____	÷	_____	=	_____
_____	÷	_____	=	_____

90

10 9

_____	x	_____	=	_____
_____	x	_____	=	_____
_____	÷	_____	=	_____
_____	÷	_____	=	_____

110

10 11

_____	x	_____	=	_____
_____	x	_____	=	_____
_____	÷	_____	=	_____
_____	÷	_____	=	_____

70

10 7

_____	x	_____	=	_____
_____	x	_____	=	_____
_____	÷	_____	=	_____
_____	÷	_____	=	_____

# Fact Families

Write the fact families for the 3 numbers in each house.

121

11 11

___	x	___	=	___
___	x	___	=	___
___	÷	___	=	___
___	÷	___	=	___

55

11 5

___	x	___	=	___
___	x	___	=	___
___	÷	___	=	___
___	÷	___	=	___

44

11 4

___	x	___	=	___
___	x	___	=	___
___	÷	___	=	___
___	÷	___	=	___

99

11 9

___	x	___	=	___
___	x	___	=	___
___	÷	___	=	___
___	÷	___	=	___

110

11 10

___	x	___	=	___
___	x	___	=	___
___	÷	___	=	___
___	÷	___	=	___

88

11 8

___	x	___	=	___
___	x	___	=	___
___	÷	___	=	___
___	÷	___	=	___

# Fact Families

Write the fact families for the 3 numbers in each house.

36

12 3

___	x	___	=	___
___	x	___	=	___
___	÷	___	=	___
___	÷	___	=	___

60

12 5

___	x	___	=	___
___	x	___	=	___
___	÷	___	=	___
___	÷	___	=	___

84

12 7

___	x	___	=	___
___	x	___	=	___
___	÷	___	=	___
___	÷	___	=	___

108

12 9

___	x	___	=	___
___	x	___	=	___
___	÷	___	=	___
___	÷	___	=	___

144

12 12

___	x	___	=	___
___	x	___	=	___
___	÷	___	=	___
___	÷	___	=	___

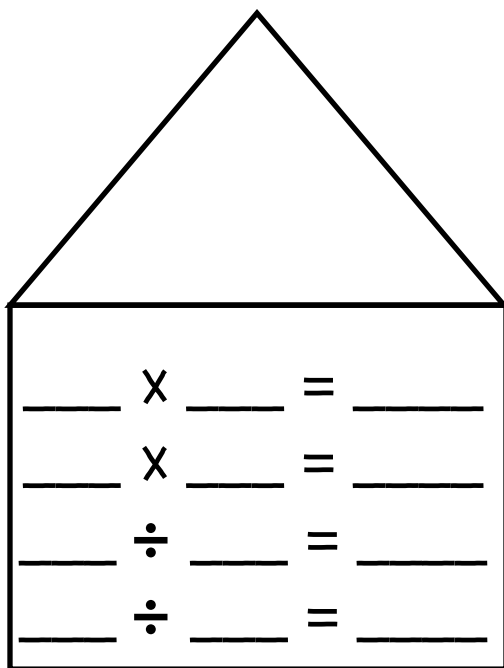
72

12 6

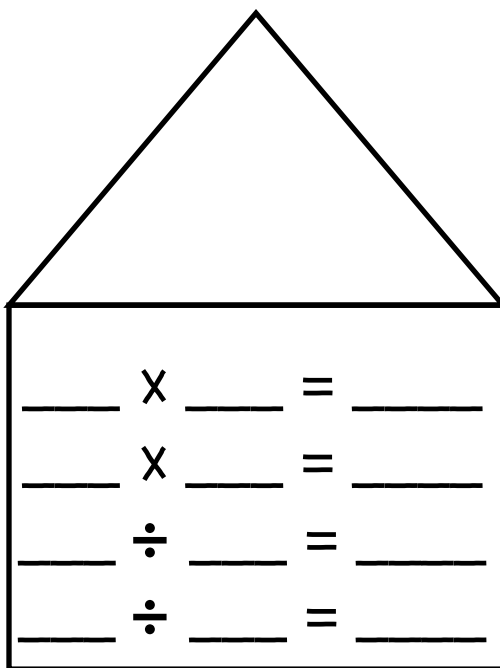
___	x	___	=	___
___	x	___	=	___
___	÷	___	=	___
___	÷	___	=	___

# Fact Families

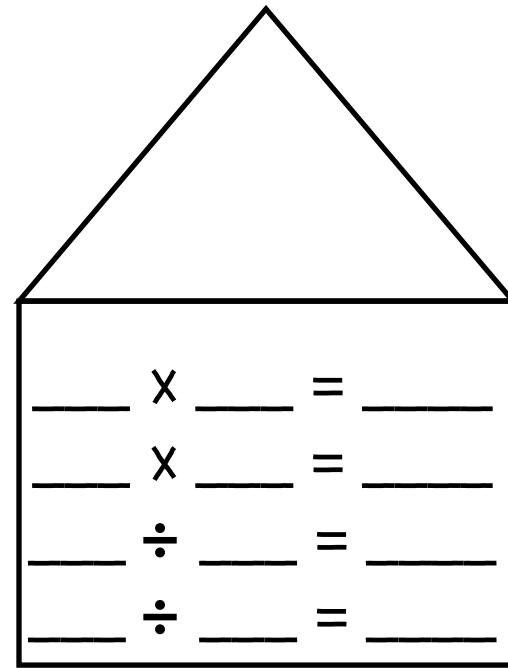
Write the fact families for the 3 numbers in each house.



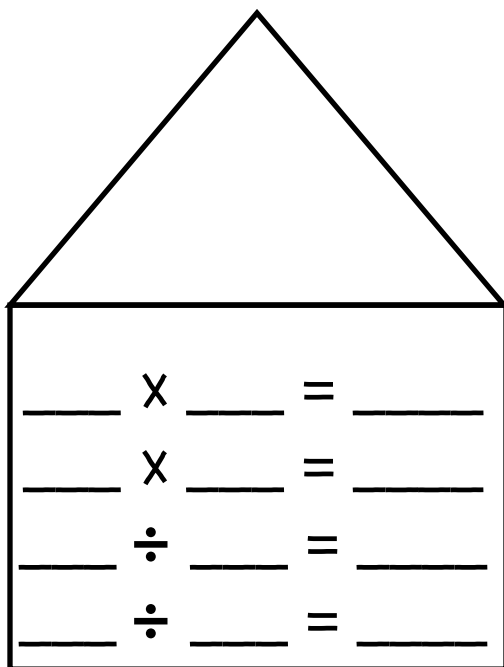
\_\_\_\_\_ X \_\_\_\_\_ = \_\_\_\_\_  
\_\_\_\_\_ X \_\_\_\_\_ = \_\_\_\_\_  
\_\_\_\_\_ ÷ \_\_\_\_\_ = \_\_\_\_\_  
\_\_\_\_\_ ÷ \_\_\_\_\_ = \_\_\_\_\_



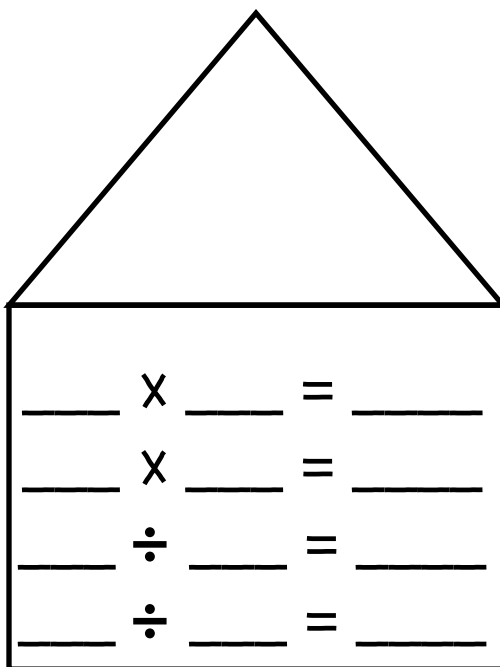
\_\_\_\_\_ X \_\_\_\_\_ = \_\_\_\_\_  
\_\_\_\_\_ X \_\_\_\_\_ = \_\_\_\_\_  
\_\_\_\_\_ ÷ \_\_\_\_\_ = \_\_\_\_\_  
\_\_\_\_\_ ÷ \_\_\_\_\_ = \_\_\_\_\_



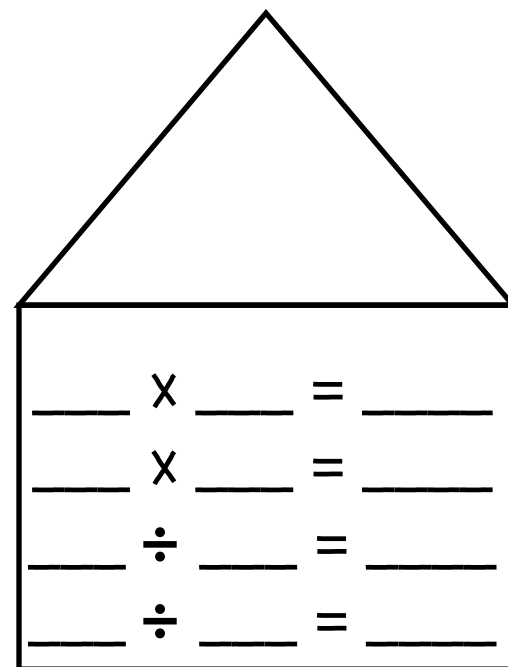
\_\_\_\_\_ X \_\_\_\_\_ = \_\_\_\_\_  
\_\_\_\_\_ X \_\_\_\_\_ = \_\_\_\_\_  
\_\_\_\_\_ ÷ \_\_\_\_\_ = \_\_\_\_\_  
\_\_\_\_\_ ÷ \_\_\_\_\_ = \_\_\_\_\_



\_\_\_\_\_ X \_\_\_\_\_ = \_\_\_\_\_  
\_\_\_\_\_ X \_\_\_\_\_ = \_\_\_\_\_  
\_\_\_\_\_ ÷ \_\_\_\_\_ = \_\_\_\_\_  
\_\_\_\_\_ ÷ \_\_\_\_\_ = \_\_\_\_\_



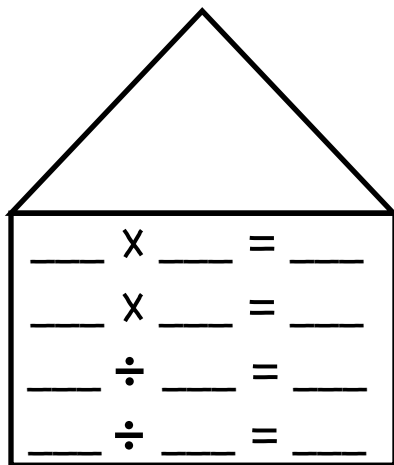
\_\_\_\_\_ X \_\_\_\_\_ = \_\_\_\_\_  
\_\_\_\_\_ X \_\_\_\_\_ = \_\_\_\_\_  
\_\_\_\_\_ ÷ \_\_\_\_\_ = \_\_\_\_\_  
\_\_\_\_\_ ÷ \_\_\_\_\_ = \_\_\_\_\_



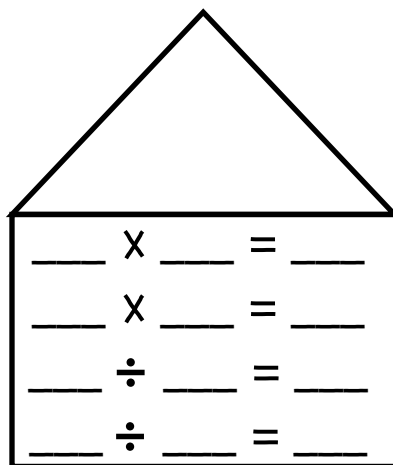
\_\_\_\_\_ X \_\_\_\_\_ = \_\_\_\_\_  
\_\_\_\_\_ X \_\_\_\_\_ = \_\_\_\_\_  
\_\_\_\_\_ ÷ \_\_\_\_\_ = \_\_\_\_\_  
\_\_\_\_\_ ÷ \_\_\_\_\_ = \_\_\_\_\_

# Fact Families

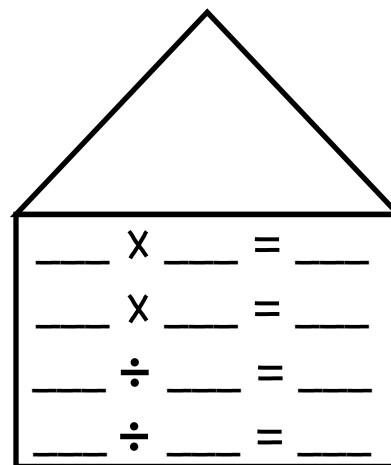
Write the fact families for the 3 numbers in each house.



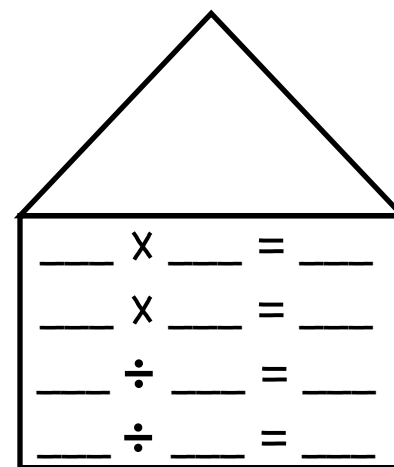
Blank fact family lines for a house:

$$\begin{array}{l} \_\_\_ \times \_\_\_ = \_\_\_ \\ \_\_\_ \times \_\_\_ = \_\_\_ \\ \_\_\_ \div \_\_\_ = \_\_\_ \\ \_\_\_ \div \_\_\_ = \_\_\_ \end{array}$$


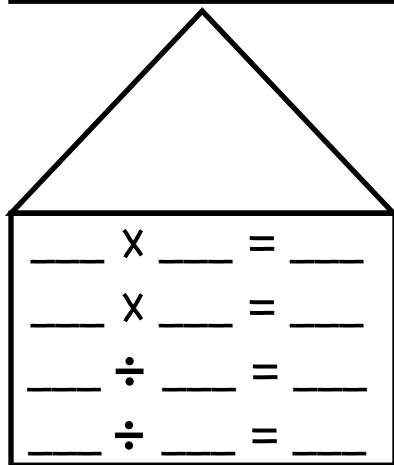
Blank fact family lines for a house:

$$\begin{array}{l} \_\_\_ \times \_\_\_ = \_\_\_ \\ \_\_\_ \times \_\_\_ = \_\_\_ \\ \_\_\_ \div \_\_\_ = \_\_\_ \\ \_\_\_ \div \_\_\_ = \_\_\_ \end{array}$$


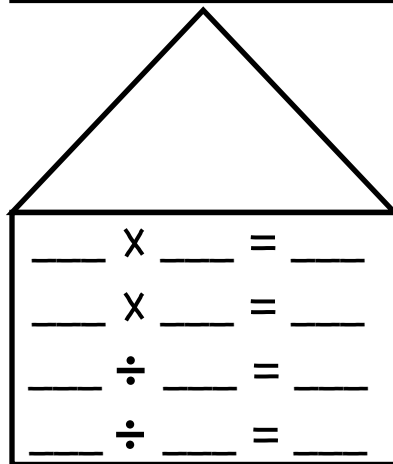
Blank fact family lines for a house:

$$\begin{array}{l} \_\_\_ \times \_\_\_ = \_\_\_ \\ \_\_\_ \times \_\_\_ = \_\_\_ \\ \_\_\_ \div \_\_\_ = \_\_\_ \\ \_\_\_ \div \_\_\_ = \_\_\_ \end{array}$$


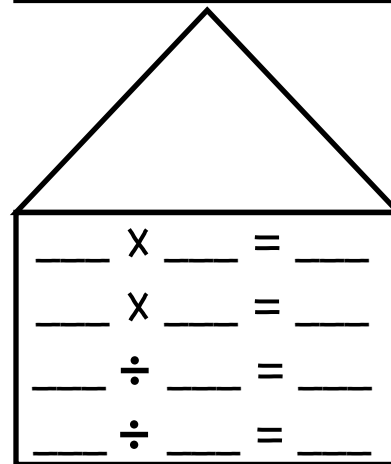
Blank fact family lines for a house:

$$\begin{array}{l} \_\_\_ \times \_\_\_ = \_\_\_ \\ \_\_\_ \times \_\_\_ = \_\_\_ \\ \_\_\_ \div \_\_\_ = \_\_\_ \\ \_\_\_ \div \_\_\_ = \_\_\_ \end{array}$$


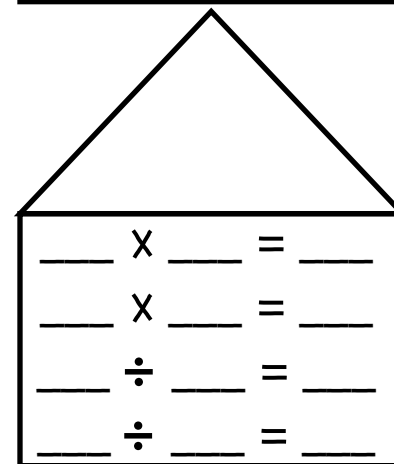
Blank fact family lines for a house:

$$\begin{array}{l} \_\_\_ \times \_\_\_ = \_\_\_ \\ \_\_\_ \times \_\_\_ = \_\_\_ \\ \_\_\_ \div \_\_\_ = \_\_\_ \\ \_\_\_ \div \_\_\_ = \_\_\_ \end{array}$$


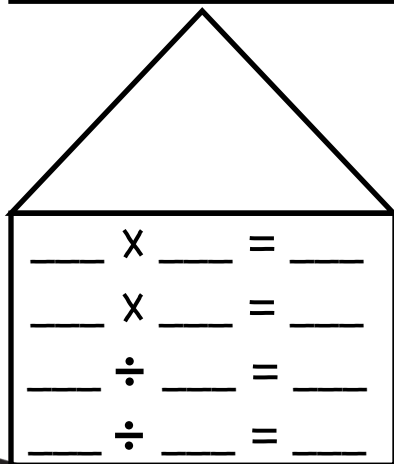
Blank fact family lines for a house:

$$\begin{array}{l} \_\_\_ \times \_\_\_ = \_\_\_ \\ \_\_\_ \times \_\_\_ = \_\_\_ \\ \_\_\_ \div \_\_\_ = \_\_\_ \\ \_\_\_ \div \_\_\_ = \_\_\_ \end{array}$$


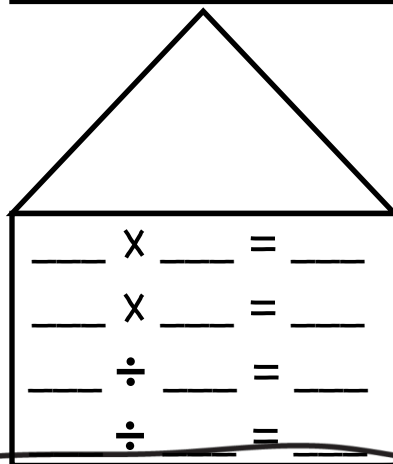
Blank fact family lines for a house:

$$\begin{array}{l} \_\_\_ \times \_\_\_ = \_\_\_ \\ \_\_\_ \times \_\_\_ = \_\_\_ \\ \_\_\_ \div \_\_\_ = \_\_\_ \\ \_\_\_ \div \_\_\_ = \_\_\_ \end{array}$$


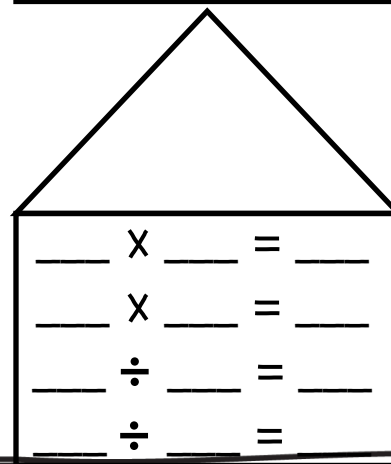
Blank fact family lines for a house:

$$\begin{array}{l} \_\_\_ \times \_\_\_ = \_\_\_ \\ \_\_\_ \times \_\_\_ = \_\_\_ \\ \_\_\_ \div \_\_\_ = \_\_\_ \\ \_\_\_ \div \_\_\_ = \_\_\_ \end{array}$$


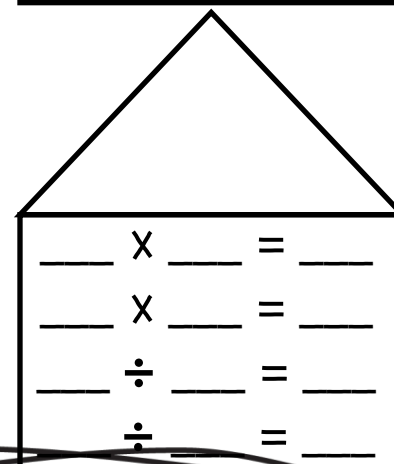
Blank fact family lines for a house:

$$\begin{array}{l} \_\_\_ \times \_\_\_ = \_\_\_ \\ \_\_\_ \times \_\_\_ = \_\_\_ \\ \_\_\_ \div \_\_\_ = \_\_\_ \\ \_\_\_ \div \_\_\_ = \_\_\_ \end{array}$$


Blank fact family lines for a house:

$$\begin{array}{l} \_\_\_ \times \_\_\_ = \_\_\_ \\ \_\_\_ \times \_\_\_ = \_\_\_ \\ \_\_\_ \div \_\_\_ = \_\_\_ \\ \_\_\_ \div \_\_\_ = \_\_\_ \end{array}$$


Blank fact family lines for a house:

$$\begin{array}{l} \_\_\_ \times \_\_\_ = \_\_\_ \\ \_\_\_ \times \_\_\_ = \_\_\_ \\ \_\_\_ \div \_\_\_ = \_\_\_ \\ \_\_\_ \div \_\_\_ = \_\_\_ \end{array}$$


Blank fact family lines for a house:

$$\begin{array}{l} \_\_\_ \times \_\_\_ = \_\_\_ \\ \_\_\_ \times \_\_\_ = \_\_\_ \\ \_\_\_ \div \_\_\_ = \_\_\_ \\ \_\_\_ \div \_\_\_ = \_\_\_ \end{array}$$

# Credits:

Thank you for your purchase! Please leave me feedback at [my TpT store](#) and let me know what you think!

Font from: [Cara Carroll](#)

Graphics from: [Scrappin Doodles](#)