




















Pictographs

Card 13

Inches of Snow

November	 
December	    
January	     
February	    

Key:  = 2 inches

Which month received the greatest amount of snow?



















- a. November
- b. December
- c. January
- d. February


© The Tulip Teacher 2015

Pictographs

Card 14

Inches of Snow

November	 
December	    
January	     
February	    

Key:  = 2 inches

How many inches of snow fell in all four months?



















- a. 4 inches
- b. 16 inches
- c. 32 inches
- d. 34 inches


© The Tulip Teacher 2015

Pictographs

Card 15

Inches of Snow

November	 
December	    
January	     
February	    

Key:  = 2 inches

How many more inches of snow did January receive than November?



















- a. 4 inches
- b. 8 inches
- c. 9 inches
- d. 2 inches


© The Tulip Teacher 2015

Pictographs

Card 16

Inches of Snow

November	 
December	    
January	     
February	    

Key:  = 2 inches

In which two months did twenty-one combined inches of snow fall?

























- a. January and December
- b. November and December
- c. January and February
- d. November and February

© The Tulip Teacher 2015

Pictographs

Card 17

Pets Owned

Dog	      
Cat	    
Fish	    
Hamster	  
Bird	   

Key:  = 5 pets

Which multiplication fact represents how many hamsters are owned?

























- a. 3×5
- b. 3×1
- c. 5×5
- d. 3×3

© The Tulip Teacher 2015

Pictographs

Card 18

Pets Owned

Dog	      
Cat	    
Fish	    
Hamster	  
Bird	   

Key:  = 5 pets

Which two pets are owned by an equal amount of people?

























- a. dogs and cats
- b. cats and fish
- c. fish and hamsters
- d. fish and birds

© The Tulip Teacher 2015

Pictographs

Card 19

Pets Owned

Dog	      
Cat	    
Fish	    
Hamster	  
Bird	   

Key:  = 5 pets

According to the pictograph, how many dogs, fish, and hamsters are owned?

























- a. 75
- b. 80
- c. 15
- d. 50

© The Tulip Teacher 2015

Pictographs

Card 20

Pets Owned

Dog	      
Cat	    
Fish	    
Hamster	  
Bird	   

Key:  = 5 pets

How many more fish and hamsters are owned than birds?






















- a. 40
- b. 60
- c. 20
- d. 30

© The Tulip Teacher 2015

Pictographs

Card 21

Miles People Live Away from Work

Sarah	    
Thomas	   
Matt	  
Kayla	     
Cooper	  

Key:  = 6 miles

According to the pictograph, who lives the closest to work?






















- a. Kayla
- b. Cooper
- c. Matt
- d. Sarah

© The Tulip Teacher 2015

Pictographs

Card 22

Miles People Live Away from Work

Sarah	    
Thomas	   
Matt	  
Kayla	     
Cooper	  

Key:  = 6 miles

How many miles do Kayla and Sarah live away from work altogether?






















- a. 66 miles
- b. 11 miles
- c. 60 miles
- d. 55 miles

© The Tulip Teacher 2015

Pictographs

Card 23

Miles People Live Away from Work

Sarah	    
Thomas	   
Matt	  
Kayla	     
Cooper	  

Key:  = 6 miles

Timothy lives 24 miles away from work. How many cars are needed to represent him on the pictograph?






















- a. 3
- b. 5 1/2
- c. 4
- d. 6

© The Tulip Teacher 2015

Pictographs

Card 24

Miles People Live Away from Work

Sarah	    
Thomas	   
Matt	  
Kayla	     
Cooper	  

Key:  = 6 miles

How much farther does Sarah live from work than Cooper?

- a. 2 miles
- b. 30 miles
- c. 45 miles
- d. 15 miles

© The Tulip Teacher 2015