

TEST NAME: **Rockwell Telling Time**
TEST ID: **2985475**
GRADE: **03 - Third Grade**
SUBJECT: **Mathematics**
TEST CATEGORY: **My Classroom**

Student: _____
Class: _____
Date: _____

1. **Jessica's clock looked like this.**



What time is on Jessica's clock?

- A. 1:30
- B. 6:00
- C. 12:06
- D. 12:30

2. Which clock shows 2:25?

A.



B.



C.



D.



3. Pam started walking to school at 7:00 a.m. It took her 10 minutes to walk to school, 2 minutes to walk to her class, and 5 minutes to begin her morning work. At what time did Pam begin her morning work?

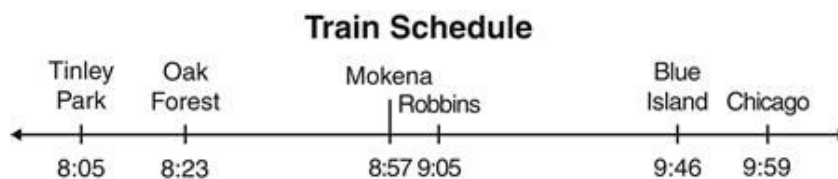
A. 7:10 a.m.

B. 7:12 a.m.

C. 7:15 a.m.

D. 7:17 a.m.

4. How many minutes does it take the train to travel from Tinley Park to Mokena?



A. 18 minutes

B. 34 minutes

C. 41 minutes

D. 52 minutes

5. What time is shown on the clock?



- A. 1:56
B. 2:33
C. 9:27
D. 12:37
6. Kristi talked to her friend Mira on the phone from 4:05 p.m. until 4:37 p.m. on Tuesday. How many minutes did Kristi talk to Mira on the phone?
- A. 28 minutes
B. 32 minutes
C. 37 minutes
D. 42 minutes
7. Math class starts at 9:10 a.m. and lasts 45 minutes. At what time does math class end?
- A. 9:45 a.m.
B. 9:50 a.m.
C. 9:55 a.m.
D. 10:00 a.m.

8. What time is shown on the watch below?



- A. 4:43
- B. 4:48
- C. 5:43
- D. 5:48

9. The bus from Charleston to Madison leaves at 10:03. Which clock shows this time?

A.



B.



C.



D.



10. Which BEST represents the time shown below?



- A.

1:55
- B.

12:05
- C.

1:45
- D.

12:55

11. Sarah leaves her house at 5:30 p.m. to walk her dog. Tyler leaves his house 25 minutes earlier to walk his dog. What time did Tyler start walking his dog?

- A. 5:05 p.m.
- B. 5:15 p.m.
- C. 5:45 p.m.
- D. 5:55 p.m.

12. Mr. Kiplinger's watch is shown below.



What time is it on his watch?

- A. 8:08
 - B. 8:40
 - C. 9:08
 - D. 9:40
13. Rosa wrote down the time that she started her homework and the time she finished it. The clocks show her start and finish times.

Started Homework



Finished Homework



How many minutes did she take to finish her homework?

- A. 10 minutes
- B. 25 minutes
- C. 30 minutes
- D. 55 minutes

14. What time does the clock show?



- A. 1:10
- B. 1:50
- C. 10:04
- D. 12:50

15. The tardy bell at Hillcrest Elementary rings at 8:12. Which clock shows this time?

A.



B.



C.



D.



16. Which clock shows 10:20?

A.



B.




C.



D.



17. What is the time shown on the clock?



- A. 6:20
- B. 6:25
- C. 7:20
- D. 7:25


18. Marsha put a cake in the oven at 10:15 a.m. She took it out at 10:45 a.m. How long was the cake in the oven?

- A. 15 minutes
- B. 30 minutes
- C. 35 minutes
- D. 45 minutes

19. Grace practiced piano for 45 minutes after school on Monday. She practiced again from 7:55 p.m. until 8:25 p.m. For how many minutes did Grace practice piano on Monday?

- A. 65 minutes
- B. 75 minutes
- C. 115 minutes
- D. 135 minutes

20. What time does the clock below show?



- A. 9:13
- B. 8:13
- C. 3:43
- D. 2:43

21. Which clock shows a time of 6:15?

A.



B.



C.



D.



22. What time is shown on this clock?



A. 2:06

B. 2:30

C. 3:06

D. 3:30

23. It takes Winnona 35 minutes to walk to the library.



If she leaves her house at 8:20, what time will she arrive at the library?

- A. 8:35
- B. 8:45
- C. 8:50
- D. 8:55

24. Which clock shows 4:38?

A.



B.



C.



D.



25. Tom repaired four phones. Each phone took 1 hour to repair. After the repairs, he took $\frac{1}{2}$ hour for lunch. He finished lunch at 1:00 p.m. At what time did Tom begin repairing the phones?
- A 2:00 p.m.
 - B 11:30 a.m.
 - C 8:30 a.m.
 - D 8:00 a.m.
26. Jeremy baked some cookies in the oven. He put them into the oven at 11:20 and took them out of the oven at 11:45. How long did the cookies bake?
- A 10 minutes
 - B 15 minutes
 - C 20 minutes
 - D 25 minutes
27. **Jules mows his lawn each week before soccer practice. At 7:05 a.m. he looked at his watch. He had exactly 35 minutes to finish mowing. What time does he need to leave for soccer practice?**
- A 7:40 a.m.
 - B 7:45 a.m.
 - C 7:50 a.m.
 - D 7:55 a.m.

28. What time does the clock show?



- A. 10:04
- B. 12:54
- C. 12:59
- D. 1:04

29. Marcus had a snack when the clock looked like the one shown below.



What time is on the clock?

- A. 2:25
- B. 3:25
- C. 5:13
- D. 5:15

30. Julio's math class started at 8:03 a.m. It ended at 9:10 a.m. How long was Julio's math class?

- A. 47 minutes
- B. 60 minutes
- C. 67 minutes
- D. 107 minutes

