

TEST NAME: **Rockwell Telling Time Uint Test**
TEST ID: **2985579**
GRADE: **03 - Third Grade**
SUBJECT: **Mathematics**
TEST CATEGORY: **My Classroom**

Student: _____
Class: _____
Date: _____

1. Terri's clock looked like the following clock when she went to bed in the evening.



What time was it?

- A. 8:30 a.m.
- B. 9:30 a.m.
- C. 8:30 p.m.
- D. 9:30 p.m.

2. Troy has a game at fifteen minutes after ten. Which clock shows the time for Troy's game?

A.



B.



C.




D.




3. Which clock shows 4:15?

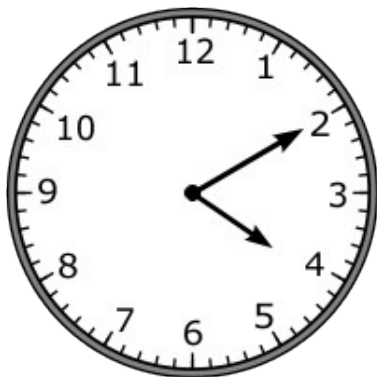
A.




B.



C.



D.



4. Stuart baked a pizza from 2:00 p.m. until 2:30 p.m. How long did the pizza bake?
- A 10 minutes
 - B 30 minutes
 - C 35 minutes
 - D 60 minutes
5. Mallory exercises from 11:15 a.m. to 11:50 a.m. each day. How much time does Mallory spend exercising each day?
- A 35 minutes
 - B 40 minutes
 - C 45 minutes
 - D 65 minutes
6. Ms. Tyson gave her students a math puzzle at 11:15 a.m. The students finished the puzzle in 17 minutes. At what time did the students finish the puzzle?
- A 11:22 a.m.
 - B 11:32 a.m.
 - C 11:34 a.m.
 - D 11:42 a.m.

7. Troy's soccer game begins at fifteen minutes after ten. Which clock shows the time that Troy's soccer game begins?

A.



B.



C.



D.



8. Allison started her music lesson at 6:40. She practiced for 1 hour and 10 minutes. Which clock shows the time when Allison finished her music lesson?

A.



B.



C.



D.



9. Phillip played outside from 1:32 p.m. until 2:14 p.m. on Saturday. How many minutes did Phillip play outside?

- A. 42 minutes
- B. 46 minutes
- C. 82 minutes
- D. 102 minutes

10. Jose's math class ended at 11:05 a.m. Lunch began at 11:50 a.m. How much time passed between the end of class and the beginning of lunch?
- A. 15 minutes
 - B. 30 minutes
 - C. 45 minutes
 - D. 50 minutes
11. At a restaurant, Kevin ordered his dinner at 5:15. The clock below shows the time when Kevin received his dinner.



How many minutes passed from the time Kevin ordered to the time he received his dinner?

- A. 20 minutes
 - B. 25 minutes
 - C. 40 minutes
 - D. 55 minutes
12. Lynn bowled with her team for 90 minutes on Friday afternoon. She bowled again with friends from 7:12 p.m. until 8:03 p.m. that evening. How many minutes did Lynn bowl in all on Friday?
- A. 138 minutes
 - B. 141 minutes
 - C. 159 minutes
 - D. 181 minutes

13. The time below is shown on a clock.



What was the time 20 minutes ago?

- A. 5:32
 - B. 6:12
 - C. 7:12
 - D. 10:46
14. **Tamara's piano lesson began at the time shown on the clock below.**



The piano lesson lasted 35 minutes. Which sentence tells a way to find the time that Tamara's piano lesson ended?

- A. Add 35 to the 15 in 3:15.
- B. Add 35 to the 20 in 3:20.
- C. Add 35 to the 20 in 2:20.
- D. Add 35 to the 15 in 4:15.

15. Which clock represents the time shown below?

3:55



16. Which of the following clocks read 8:41?

A.



B.



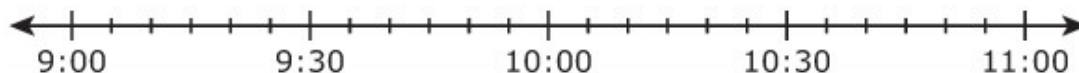
C.



D.



17. On the time line below, each space between the marks represents 5 minutes.



Lu Ming starts practicing the piano at 9:15 a.m. She practices for 45 minutes. At what time will Lu Ming finish practicing the piano?

A. 9:30 a.m.

B. 9:45 a.m.

C. 10:00 a.m.

D. 10:15 a.m.

18. On Saturday, George and his mother are going to see a movie. The movie starts at 2:35 p.m., and it takes them 20 minutes to get to the theater. What time will they need to leave to get there 5 minutes before the movie starts?

- A. 2:10 p.m.
- B. 2:15 p.m.
- C. 2:20 p.m.
- D. 2:25 p.m.

19. What time is shown on the clock below?



- A. 3:08
- B. 3:40
- C. 8:03
- D. 8:15

20. James started making breakfast at 9:15. It took 5 minutes to mix the pancakes, 10 minutes to cook, and 10 minutes to cut up the fruit. At what time was James finished with these three breakfast tasks?

- A. 9:40 a.m.
- B. 9:35 a.m.
- C. 9:30 a.m.
- D. 9:20 a.m.

21. The principal decided to have a fire drill on Friday at 1:36. Which clock shows that time?

A.



B.



C.

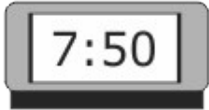


D.



22. Juan went to sleep at 8:10. He woke up 20 minutes later. Which clock shows when Juan woke up?

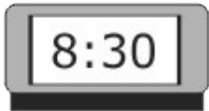
A.



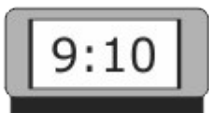
B.



C.



D.



23. Tim arrived at soccer practice at the time shown on the clock.



Which time is closest to the time Tim arrived at soccer practice?

- A. 3:00
- B. 3:15
- C. 3:20
- D. 3:30

24. Jamie's football practice started at five o'clock. If his practice lasted for 55 minutes, which watch shows the time it ended?

A.



B.



C.



D.



25. Which **BEST** represents the time shown on the clock below?



- A. 8:10
- B. 8:15
- C. 8:20
- D. 8:25