



13

Riley found 45 gold coins. Collin found double the amount of coins that Riley found. How many gold coins did Riley and Collin find?




14

Margaret had 50 shamrock stickers to share with her friends. Before meeting with her friends, her grandma gave her 22 more shamrock stickers. If she wanted to share them equally with her 8 friends, how many shamrock stickers do they each get?




15

Reagan and Patrick were making a leprechaun trap together. They wanted to put Lucky Charm cereal in piles around the trap. Reagan had 24 pieces and Patrick had 32 pieces. They wanted to make 7 equal piles. How many Lucky Charms did they put in each pile?




16

On Friday, Sean spent 48 minutes practicing his tin whistle. On Saturday, he spend 53 minutes practicing. If he has to practice for a total of 165 minutes over the weekend, how many minutes does he need to spend practicing on Sunday?




17

Connor saw 5 Greyhound dogs at the St. Patrick's Day parade. Nolan saw 4 Greyhound dogs. How many Greyhound legs did Connor and Nolan see?




18

Riley made 52 shamrock cookies for her classmates. She ate 3 cookies before putting the rest into containers. If she wanted to put them equally into 7 containers, how many cookies would go into each container?




19

Sheila had 45 mini shamrock erasers. Patrick had 27 mini shamrock erasers. They wanted to divide these up equally with 8 friends. How many mini shamrock erasers did each friend get?




20

Liam was supposed to practice his tin whistle for 250 minutes each week. On Tuesday, he practiced for 32 minutes. On Wednesday, he practiced for 38 minutes and on Thursday, he practiced for 42 minutes. How many more minutes does he need to practice?




21

Molly's mom made 300 mini Irish flags to sell at the craft fair. On Saturday, she sold 99. Then on Sunday, she sold 134. How many flags did she have left over?




22

Reagan bought 10 shamrock pencils that cost 30 cents each. If she paid with \$5.00 how much money did she get back?



23

Kathleen bought 5 mini shamrock cupcakes for 50 cents each. She paid with a 5 dollar bill. How much money did she get back?



24

Aidan had to do a country report for school and chose Ireland. He had 380 pages to read. On Monday, he read 60 pages. On Tuesday, he read 55 pages, and on Wednesday he read 87 pages. How many more pages does he have to read?

